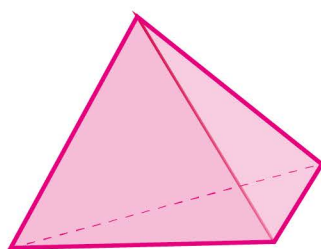


Name: ..... Class: .....

## Identify shapes traced from solid


From this shape can you trace a triangle ?



Tick the answer.

 yes no

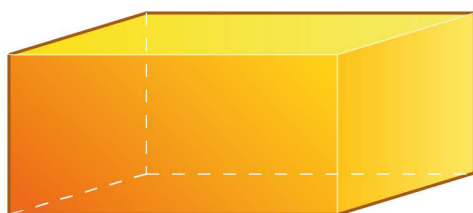
From this shape can you trace a square ?



Tick the answer.

 yes no

From this shape can you trace a rectangle ?



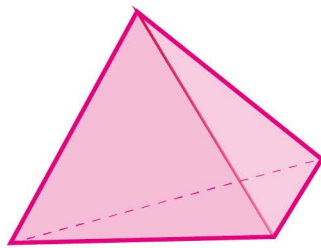
Tick the answer.

 yes no

Name: ..... Class: .....

## Identify shapes traced from solid


From this shape can you trace a triangle ?



Tick the answer.



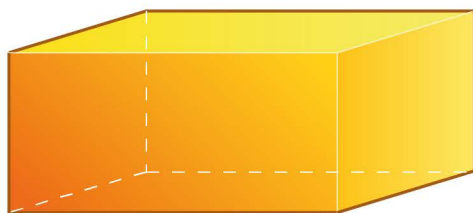
From this shape can you trace a square ?



Tick the answer.



From this shape can you trace a rectangle ?



Tick the answer.

