


## Equal groups - Multiplication sentences


Which multiplication expression describes the model?



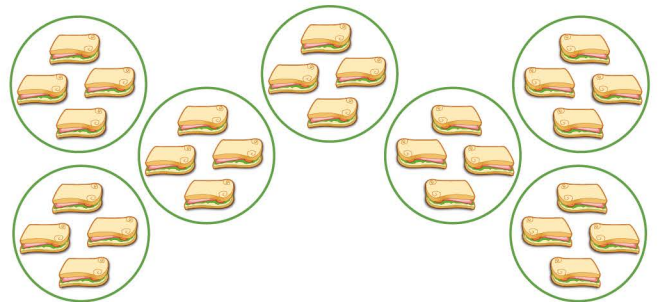
$10 \times 2$    $12 \times 3$    $3 \times 10$



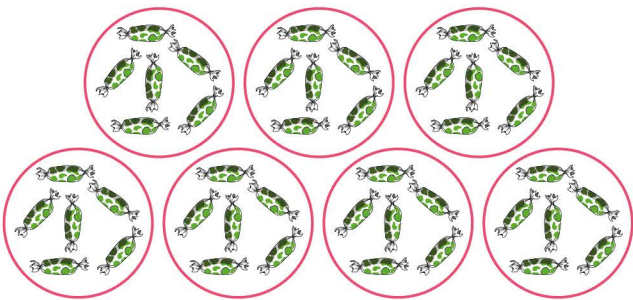
$5 \times 9$    $4 \times 6$    $8 \times 7$



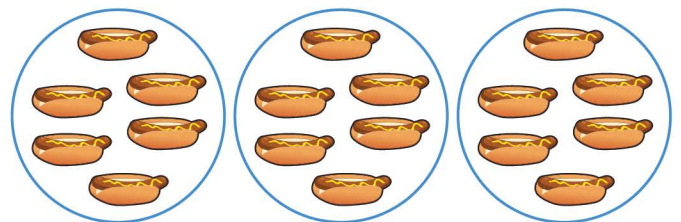
$4 \times 9$    $3 \times 10$    $3 \times 11$




$7 \times 4$    $7 \times 3$    $7 \times 5$




$8 \times 6$    $8 \times 5$    $7 \times 6$



$3 \times 6$    $4 \times 4$    $3 \times 2$



$6 \times 3$    $7 \times 2$    $5 \times 4$



$1 \times 5$    $2 \times 7$    $2 \times 6$