


## Arrays - Identify multiplication sentences


Which multiplication expression describes the model?



$10 \times 5$

$12 \times 4$


$9 \times 12$



$5 \times 7$

$4 \times 5$


$3 \times 2$



$8 \times 7$

$6 \times 9$

$7 \times 5$



$4 \times 4$

$7 \times 3$

$5 \times 7$