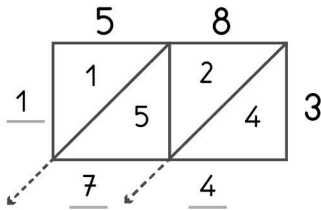


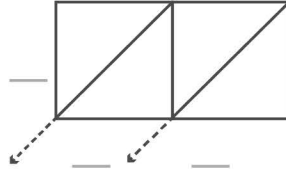


-digit multiplication : Lattice method

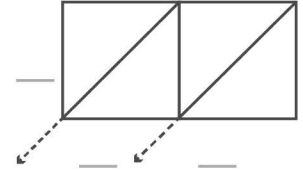
Work out the answers to these multiplication questions using the lattice method.



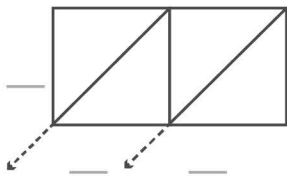
$$58 \times 3 = 174$$



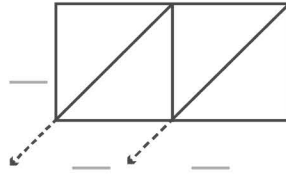
$$17 \times 2 = \underline{\quad}$$



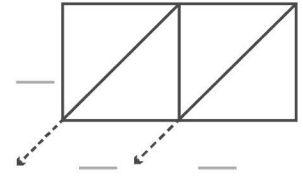
$$22 \times 8 = \underline{\quad}$$



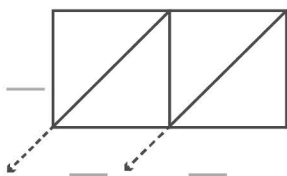
$$24 \times 5 = \underline{\quad}$$



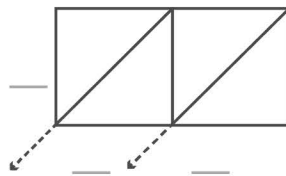
$$14 \times 9 = \underline{\quad}$$



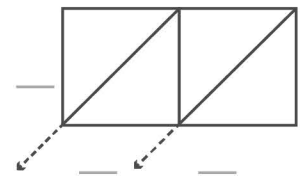
$$16 \times 7 = \underline{\quad}$$



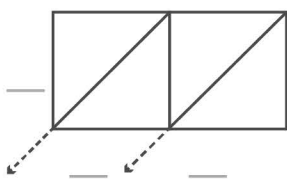
$$27 \times 3 = \underline{\quad}$$



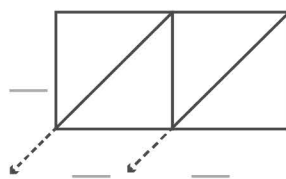
$$19 \times 9 = \underline{\quad}$$



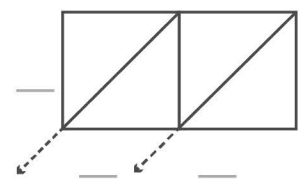
$$21 \times 7 = \underline{\quad}$$



$$20 \times 6 = \underline{\quad}$$



$$15 \times 5 = \underline{\quad}$$



$$29 \times 9 = \underline{\quad}$$