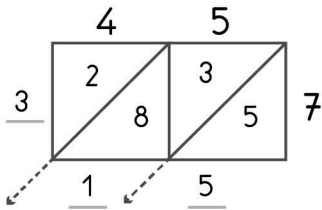


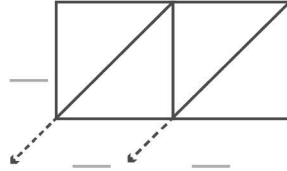


## -digit multiplication : Lattice method

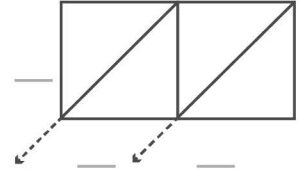
Work out the answers to these multiplication questions using the lattice method.



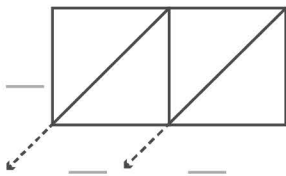
$$45 \times 7 = 315$$



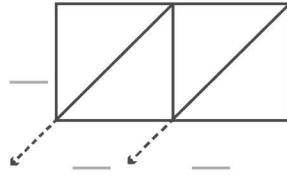
$$78 \times 8 = \underline{\quad}$$



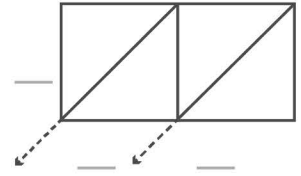
$$29 \times 9 = \underline{\quad}$$



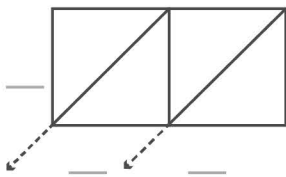
$$17 \times 6 = \underline{\quad}$$



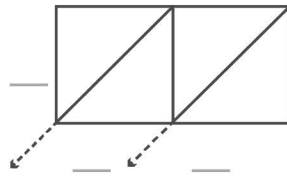
$$54 \times 7 = \underline{\quad}$$



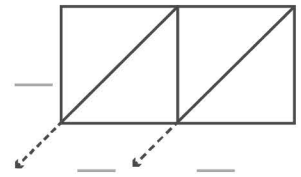
$$75 \times 5 = \underline{\quad}$$



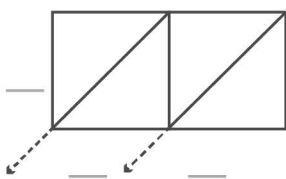
$$36 \times 4 = \underline{\quad}$$



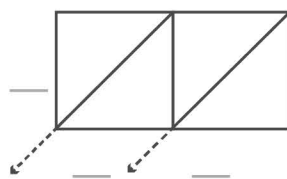
$$68 \times 3 = \underline{\quad}$$



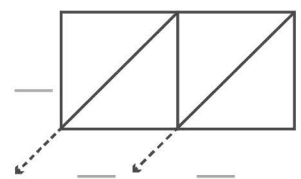
$$38 \times 7 = \underline{\quad}$$



$$95 \times 6 = \underline{\quad}$$



$$81 \times 9 = \underline{\quad}$$



$$57 \times 4 = \underline{\quad}$$