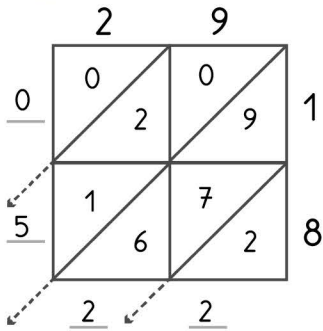


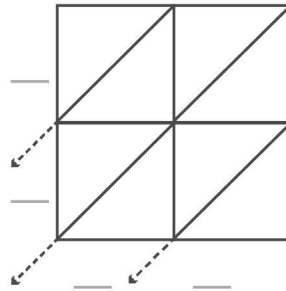


**-digit multiplication : Lattice method**

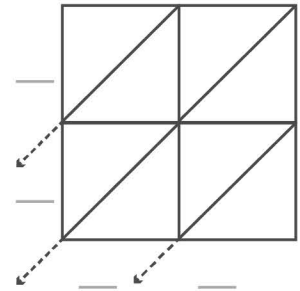
Work out the answers to these multiplication questions using the lattice method.



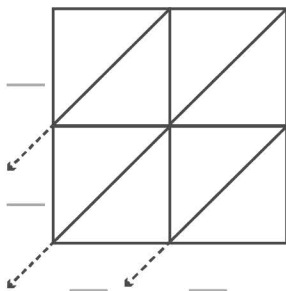
$29 \times 18 = 522$



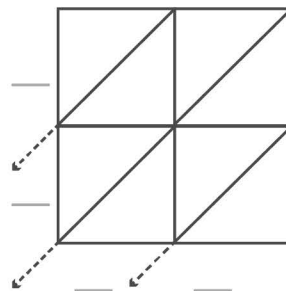
$17 \times 16 = \underline{\quad}$



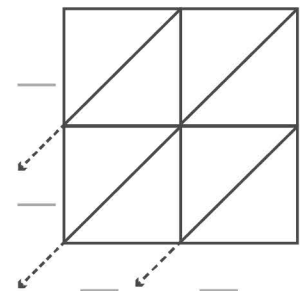
$26 \times 21 = \underline{\quad}$



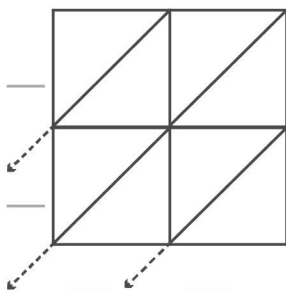
$29 \times 25 = \underline{\quad}$



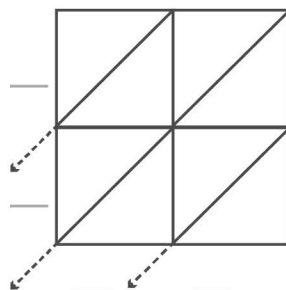
$27 \times 17 = \underline{\quad}$



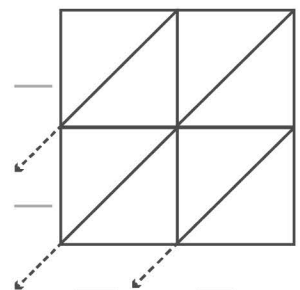
$15 \times 14 = \underline{\quad}$



$28 \times 25 = \underline{\quad}$



$19 \times 14 = \underline{\quad}$



$24 \times 19 = \underline{\quad}$