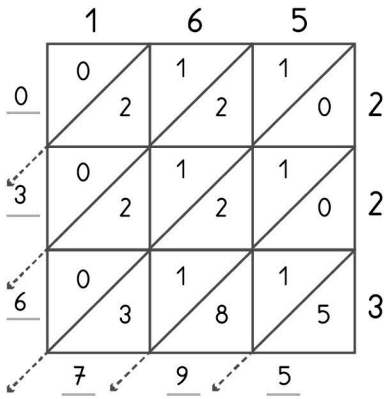


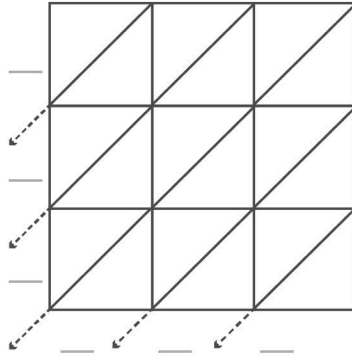
3

-digit multiplication : Lattice method

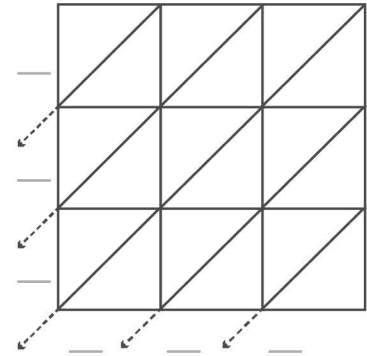
Work out the answers to these multiplication questions using the lattice method.



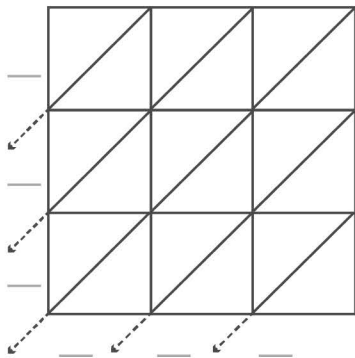
$165 \times 223 = 36,795$



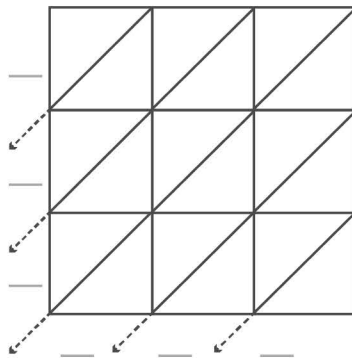
$284 \times 209 = \underline{\hspace{2cm}}$



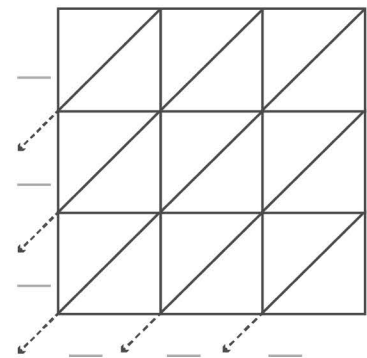
$135 \times 121 = \underline{\hspace{2cm}}$



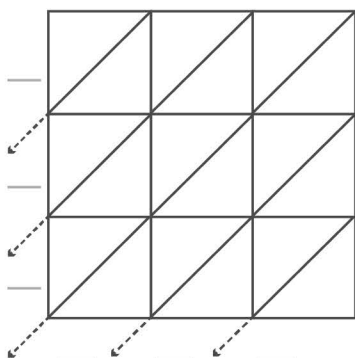
$181 \times 167 = \underline{\hspace{2cm}}$



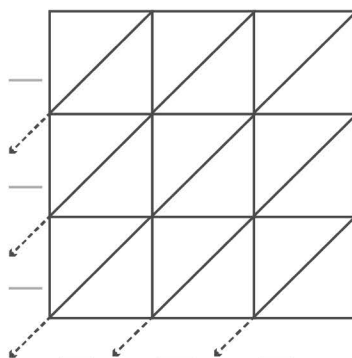
$254 \times 196 = \underline{\hspace{2cm}}$



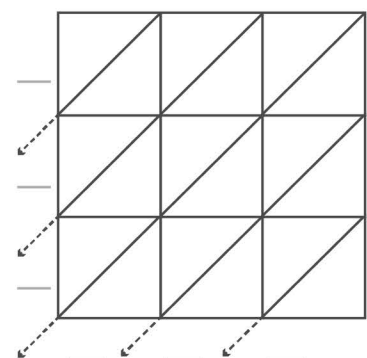
$178 \times 125 = \underline{\hspace{2cm}}$



$228 \times 204 = \underline{\hspace{2cm}}$



$165 \times 145 = \underline{\hspace{2cm}}$



$275 \times 263 = \underline{\hspace{2cm}}$