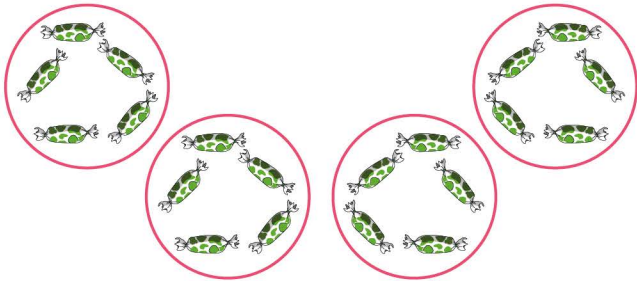



## Repeated addition for equal groups


For each model, write equal group as repeated addition.



$$5 + 5 + 5 + 5 =$$




$$\underline{\quad} + \underline{\quad} =$$




$$\underline{\quad} + \underline{\quad} + \underline{\quad} + \underline{\quad} + \underline{\quad} =$$



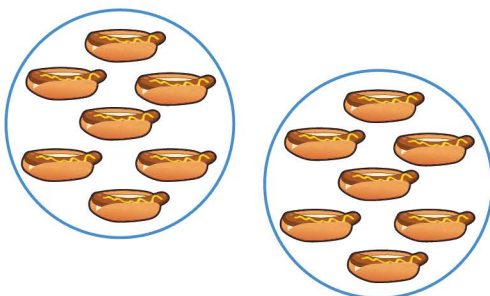
$$\underline{\quad} + \underline{\quad} + \underline{\quad} + \underline{\quad} + \underline{\quad} + \underline{\quad} + \underline{\quad} =$$




$$\underline{\quad} + \underline{\quad} + \underline{\quad} + \underline{\quad} =$$



$$\underline{\quad} + \underline{\quad} + \underline{\quad} + \underline{\quad} + \underline{\quad} + \underline{\quad} + \underline{\quad} + \underline{\quad} + \underline{\quad} =$$



$$\underline{\quad} + \underline{\quad} =$$



$$\underline{\quad} + \underline{\quad} + \underline{\quad} + \underline{\quad} + \underline{\quad} + \underline{\quad} + \underline{\quad} =$$